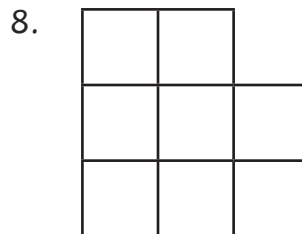
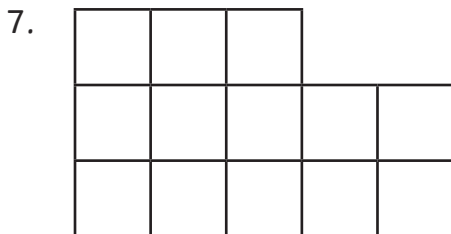
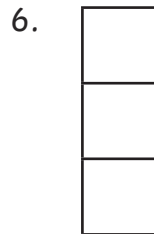
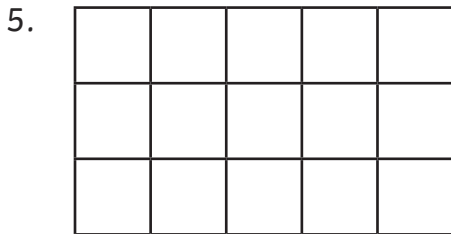
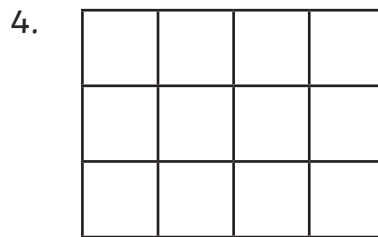

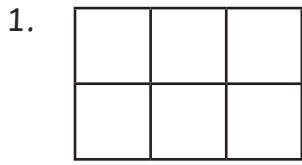


Calculate the Area

What is the area of these shapes in cm^2 ?

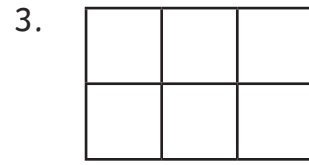


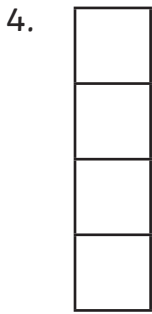
Calculate the Area


What is the area of these shapes in cm^2 ?

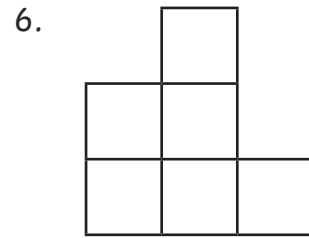


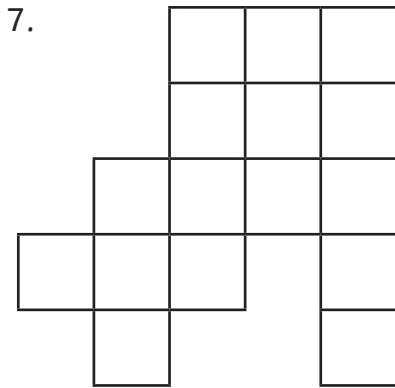





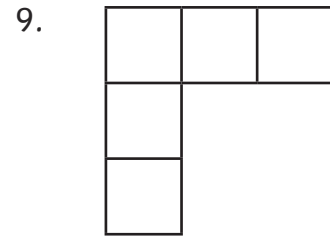


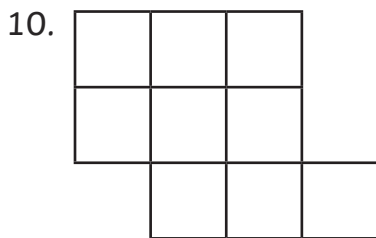


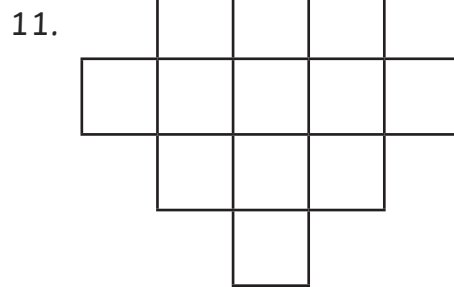











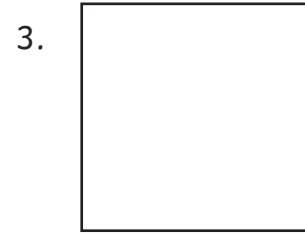



Calculate the Area

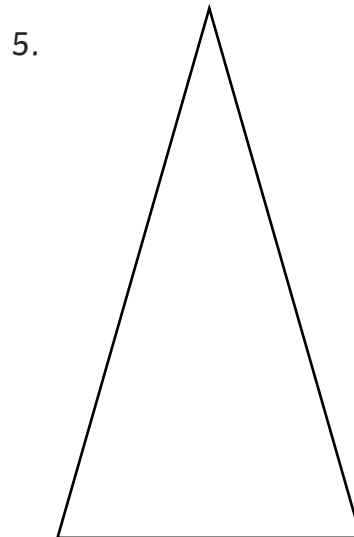
Measure and calculate the area of these shapes in cm^2 ?

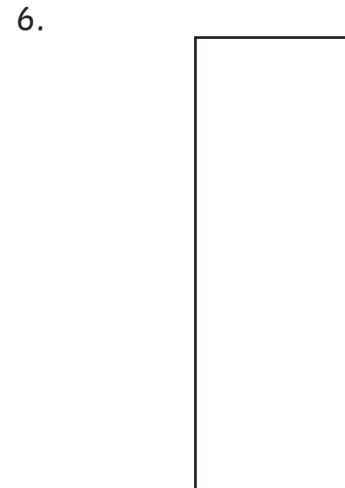


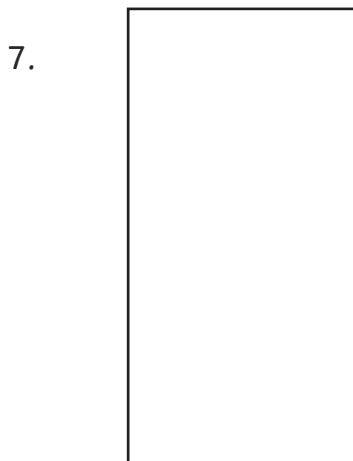


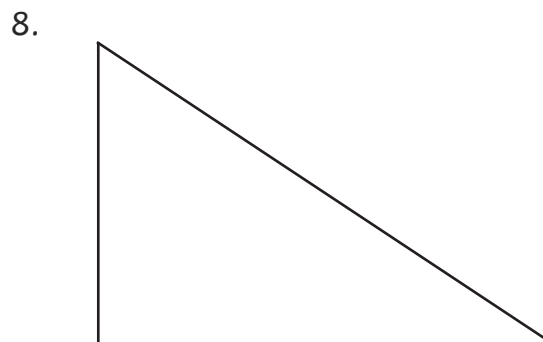


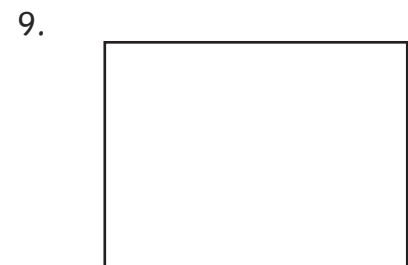
















Calculate the Area

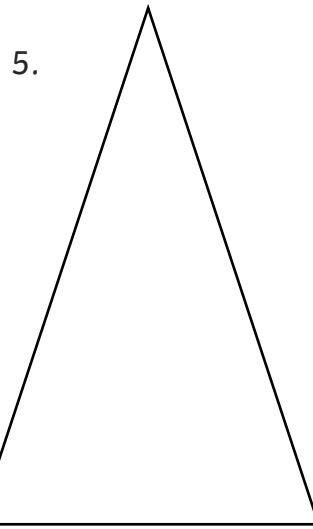
Measure and calculate the area of these shapes in mm^2 ?







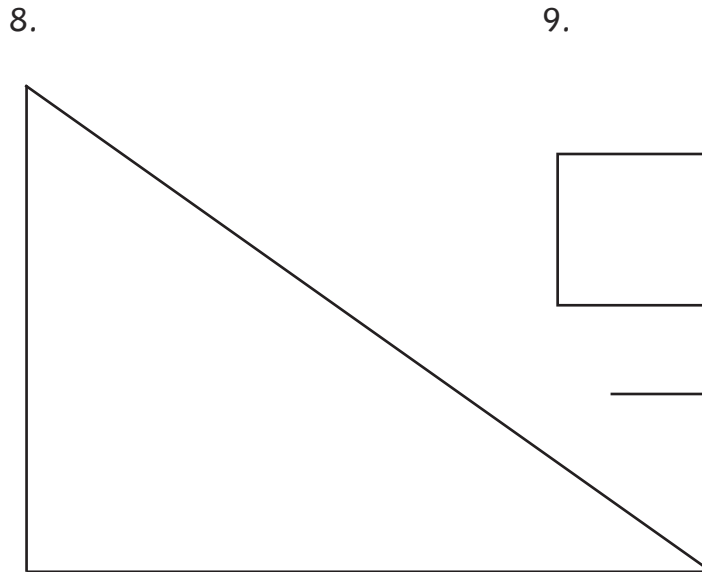















Calculate the Area Answers *

1. 6cm^2

2. 10cm^2

3. 9cm^2

4. 12cm^2

5. 15cm^2

6. 3cm^2

7. 13cm^2

8. 8cm^2

Calculate the Area Answers **

1. 3cm^2

2. 10cm^2

3. 6cm^2

4. 4cm^2

5. 11cm^2

6. 6cm^2

7. 16cm^2

8. 12cm^2

9. 5cm^2

10. 9cm^2

11. 12cm^2

Calculate the Area Answers ***

1. $3\text{cm} \times 2\text{cm} = 6\text{cm}^2$

2. $4\text{cm} \times 5\text{cm} = 20\text{cm}^2$

3. $3\text{cm} \times 3\text{cm} = 9\text{cm}^2$

4. $5\text{cm} \times 6\text{cm} = 30\text{cm}^2$

5. $7\text{cm} \times 4\text{cm} \div 2 = 14\text{cm}^2$

6. $2\text{cm} \times 6\text{cm} = 12\text{cm}^2$

7. $6\text{cm} \times 3\text{cm} = 18\text{cm}^2$

8. $6\text{cm} \times 4\text{cm} \div 2 = 12\text{cm}^2$

9. $4\text{cm} \times 3\text{cm} = 12\text{cm}^2$

Calculate the Area Answers ***

1. $27\text{mm} \times 62\text{mm} = 1674\text{mm}^2$

2. $27\text{mm} \times 33\text{mm} = 891\text{mm}^2$

3. $28\text{mm} \times 28\text{mm} = 784\text{mm}^2$

4. $57\text{mm} \times 57\text{mm} = 3249\text{mm}^2$

5. $68\text{mm} \times 45\text{mm} \div 2 = 1530\text{mm}^2$

6. $25\text{mm} \times 54\text{mm} = 1350\text{mm}^2$

7. $25\text{mm} \times 65\text{mm} = 1625\text{mm}^2$

8. $90\text{mm} \times 64\text{cm} \div 2 = 2880\text{mm}^2$

9. $20\text{mm} \times 55\text{mm} = 1100\text{mm}^2$